

**NURTURE INTERNATIONAL SCHOOL**  
( Affiliated to CISCE , New Delhi )  
**EMPOWER -1 REVISION WORKSHEET**

**Class : I**

**Subject : Maths**

a)  $4 + \underline{\quad} = 7$

b)  $5+5=$  \_\_\_\_\_

c)  $7 + \underline{\quad} = 10$

d)  $10 + 5 =$  \_\_\_\_\_

1.23 , \_\_\_\_\_ , 26

2. \_\_\_\_\_, 56, \_\_\_\_\_


3.34, \_\_\_\_\_, 36


4.81,82,\_\_\_\_\_

$$1.2 \times 3 = \underline{\hspace{2cm}} = \underline{\hspace{2cm}}$$

$$2.5 \times 4 = \underline{\hspace{2cm}} = \underline{\hspace{2cm}}$$

$$3.7 \times 5 = \underline{\hspace{2cm}} = \underline{\hspace{2cm}}$$

1.  = \_\_\_\_\_

2.  = \_\_\_\_\_

1. Rohit has 12 pens and his friend gave him 10 more pens .Find the total number of pens with Rohit.


**Solution :**

2. A monkey has 1 tail .Find how many tails did 8 monkeys have .

**Solution:**

3. Harry has 14 balls .His mother gave him 6 more balls . Find how many balls did he have .

**Solution :** \_\_\_\_\_

1. 

2. 




**NURTURE INTERNATIONAL SCHOOL**  
 (Affiliated to CISCE, New Delhi)  
**Tier 2**  
**Maths Revision Sheet**

Name: \_\_\_\_\_

Date: \_\_\_\_\_



Class: I



**1) Guess and fill it :**



**2) Count and add :**

a)  +  =

b)  +  =

c)  +  =

**3) Add using grid :**

a) 

6	7
1	2

b) 

4	5
2	0

c) 

3	8
6	0